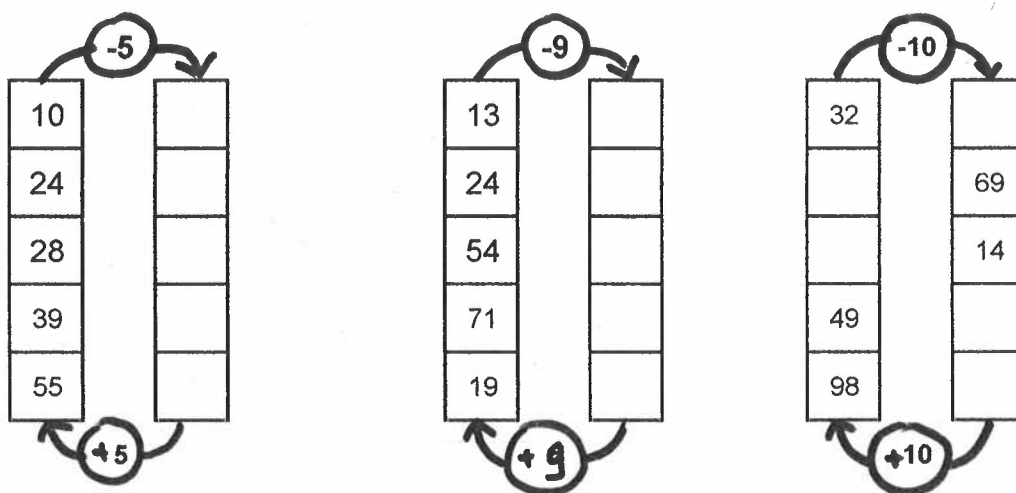


CONSOLIDATION, REVISION

1) Complète les égalités suivantes :

- | | | |
|-------------------|----|-------------------|
| $9 + \dots = 10$ | ou | $10 - 9 = \dots$ |
| $5 + \dots = 12$ | ou | $12 - 5 = \dots$ |
| $14 + \dots = 22$ | ou | $22 - 14 = \dots$ |
| $23 + \dots = 30$ | ou | $30 - 23 = \dots$ |
| $6 + \dots = 17$ | ou | $17 - 6 = \dots$ |
| $13 + \dots = 24$ | ou | $24 - 13 = \dots$ |
| $15 + \dots = 30$ | ou | $30 - 15 = \dots$ |

2°) Complète les tableaux suivants :



3°) Complète avec les + ou - :

- | | | | |
|------------------|-------------------|--------------------|--------------------|
| $6 \dots 6 = 12$ | $10 \dots 8 = 18$ | $15 \dots 25 = 40$ | $45 \dots 40 = 5$ |
| $14 \dots 8 = 6$ | $15 \dots 9 = 4$ | $40 \dots 15 = 25$ | $74 \dots 21 = 53$ |

4°) Complète les additions à trous (attention n'oublie de noter les retenues !)

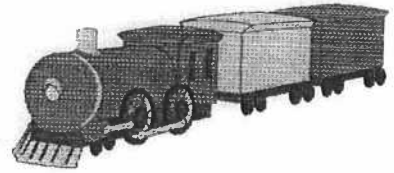
| | | | | |
|--|--|--|---|---|
| $\begin{array}{r} 47 \\ + \quad - \\ \hline 69 \end{array}$ | $\begin{array}{r} 51 \\ + \quad - \\ \hline 97 \end{array}$ | $\begin{array}{r} 3 \quad - \\ + \quad - 2 \\ \hline 68 \end{array}$ | $\begin{array}{r} 138 \\ + \quad - \quad - \\ \hline 479 \end{array}$ | $\begin{array}{r} 2 \quad - 5 \\ + \quad - 7 \quad - \\ \hline 676 \end{array}$ |
| $\begin{array}{r} 22 \\ + \quad - \quad - \\ \hline \end{array}$ | $\begin{array}{r} 38 \\ + \quad - \quad - \\ \hline \end{array}$ | $\begin{array}{r} 4 \quad - \\ + \quad - 5 \\ \hline \end{array}$ | $\begin{array}{r} 215 \\ + \quad - \quad - \quad - \\ \hline \end{array}$ | $\begin{array}{r} 3 \quad - 7 \\ + \quad - 8 \quad - \\ \hline \end{array}$ |

Rends à chaque enfant son jouet.



Eva

$$\begin{array}{r} 71 \\ - 28 \\ \hline \end{array}$$




46



Léo

$$\begin{array}{r} 91 \\ - 45 \\ \hline \end{array}$$



43

Paul



$$\begin{array}{r} 342 \\ - 257 \\ \hline \end{array}$$



85

Rends à chaque enfant son jouet favori



$75 - 34 = \bullet$

$\bullet 142$



$198 - 56 = \bullet$

$\bullet 41$



$850 - 132 = \bullet$

$\bullet 716$



$69 - 25 = \bullet$

$\bullet 121$



$255 - 134 = \bullet$

$\bullet 44$





Calcul

Fiche 1

Les soustractions

1 Calcule ces soustractions en colonne:

$$\begin{array}{r} 352 \\ - 130 \\ \hline \end{array}$$

$$\begin{array}{r} 364 \\ - 210 \\ \hline \end{array}$$

$$\begin{array}{r} 355 \\ - 141 \\ \hline \end{array}$$

$$\begin{array}{r} 244 \\ - 42 \\ \hline \end{array}$$

$$\begin{array}{r} 358 \\ - 10 \\ \hline \end{array}$$

2 Calcule ces soustractions en colonne:

453 - 223

| | | | |
|--|--|--|--|
| | | | |
| | | | |
| | | | |
| | | | |
| | | | |
| | | | |
| | | | |
| | | | |

375 - 134

| | | | |
|--|--|--|--|
| | | | |
| | | | |
| | | | |
| | | | |
| | | | |
| | | | |
| | | | |
| | | | |

887 - 351

| | | | |
|--|--|--|--|
| | | | |
| | | | |
| | | | |
| | | | |
| | | | |
| | | | |
| | | | |
| | | | |

486 - 231

| | | | |
|--|--|--|--|
| | | | |
| | | | |
| | | | |
| | | | |
| | | | |
| | | | |
| | | | |
| | | | |

3 Calcule ces différences en colonne: (attention à l'ordre des nombres)

541 224

| | | | |
|--|--|--|--|
| | | | |
| | | | |
| | | | |
| | | | |
| | | | |
| | | | |
| | | | |
| | | | |

143 475

| | | | |
|--|--|--|--|
| | | | |
| | | | |
| | | | |
| | | | |
| | | | |
| | | | |
| | | | |
| | | | |

346 243

| | | | |
|--|--|--|--|
| | | | |
| | | | |
| | | | |
| | | | |
| | | | |
| | | | |
| | | | |
| | | | |

194 74

| | | | |
|--|--|--|--|
| | | | |
| | | | |
| | | | |
| | | | |
| | | | |
| | | | |
| | | | |
| | | | |